


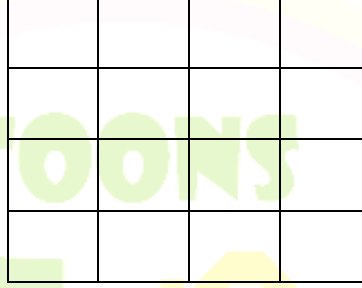


ورقة عمل رياضيات للصف الرابع الابتدائي


1- ألون بقدر الكسر المطلوب :



$$\frac{6}{15}$$



$$\frac{1}{4}$$



$$\frac{7}{12}$$

2- ضع دائرة حول الكسر المكافئ للكسر المطلوب :

$\frac{7}{8}$	$\frac{1}{3}$	$\frac{5}{13}$	$\frac{3}{9}$
$\frac{8}{6}$	$\frac{4}{9}$	$\frac{4}{16}$	$\frac{1}{4}$

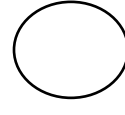
3- ضع اشارة < أو > أو = :

$$\frac{3}{4} \quad \bigcirc \quad \frac{1}{2}$$

$$3 \frac{2}{7} \quad \bigcirc \quad 2 \frac{1}{7}$$



$$\frac{15}{25}$$




$$\frac{3}{5}$$

$$2\frac{1}{7}$$




$$3\frac{1}{3}$$

$$\frac{5}{12}$$



$$\frac{6}{12}$$

$$6\frac{2}{3}$$



$$6\frac{1}{2}$$

4- جد ناتج الكسور التالية :

$$\boxed{} = \frac{5}{4} + \frac{3}{4}$$

$$\boxed{} = 7\frac{4}{7} + 2\frac{3}{7}$$

$$\boxed{} = \frac{2}{12} + \frac{1}{6}$$

$$\boxed{} = 2\frac{3}{8} - 4\frac{5}{8}$$

$$\boxed{} = 4\frac{2}{5} + 2\frac{3}{7}$$

$$\boxed{} = 2\frac{3}{6} - 8$$

$$\boxed{} = \frac{1}{6} - \frac{9}{18}$$