





ورقة عمل رياضيات للصف الرابع الابتدائي

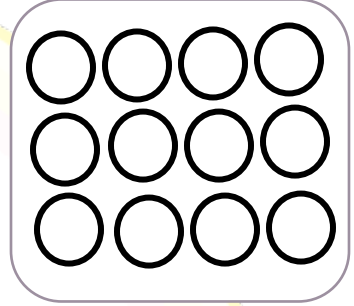
١- ألون بقدر الكسر المطلوب :



$$\frac{7}{10}$$



$$\frac{1}{4}$$



$$\frac{7}{12}$$

٢- ضع دائرة حول الكسر المكافئ للكسر المطلوب :

$\frac{7}{8}$	$\frac{1}{3}$	$\frac{5}{13}$	$\frac{3}{9}$
$\frac{8}{6}$	$\frac{4}{9}$	$\frac{4}{16}$	$\frac{1}{4}$

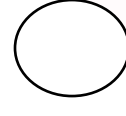


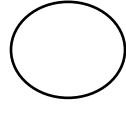
٣- ضع اشارة < أو > أو = :

$$\frac{3}{4} \quad \bigcirc \quad \frac{1}{2}$$
$$\frac{2}{3} \quad \bigcirc \quad \frac{1}{2}$$



$$\frac{2}{5} - \frac{1}{5}$$

$$\frac{2}{3} - \frac{1}{3}$$



$$\frac{2}{5} - \frac{1}{5}$$

$$\frac{2}{3} - \frac{1}{3}$$

٤- جد ناتج الكسور التالية :

$$\square = \frac{5}{4} +$$

$$\square = \frac{4}{7} +$$

$$\square = \frac{2}{12} +$$

$$\square = \frac{2}{8} -$$

$$\square = \frac{2}{4} +$$

$$\square = \frac{2}{7} -$$

$$\square = \frac{1}{7} -$$

$$\frac{2}{4}$$

$$\frac{2}{7}$$

$$\frac{1}{6}$$

$$\frac{5}{8}$$

$$\frac{2}{5}$$

$$\frac{1}{8}$$

$$\frac{1}{7}$$

$$\frac{2}{4}$$

$$\frac{2}{7}$$

$$\frac{1}{6}$$

$$\frac{5}{8}$$

$$\frac{2}{7}$$

$$\frac{1}{8}$$

$$\frac{9}{18}$$